

Name : \_\_\_\_\_

Answer the following.

$40 + 9 = \underline{\hspace{2cm}}$

$24 - 12 = \underline{\hspace{2cm}}$

$51 + \underline{\hspace{2cm}} = 68$

$9 \div 3 = \underline{\hspace{2cm}}$

$18 - \underline{\hspace{2cm}} = 6$


$\underline{\hspace{2cm}} + 12 = 19$

$9 \text{ tens and } 4 \text{ ones} = \underline{\hspace{2cm}}$


$3 \times 6 = \underline{\hspace{2cm}}$

$20 \div 2 = \underline{\hspace{2cm}}$

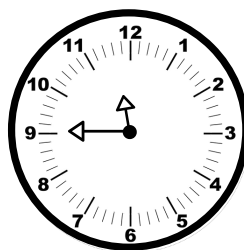
Write 1 to 5 to show the order from the smallest to the tallest.



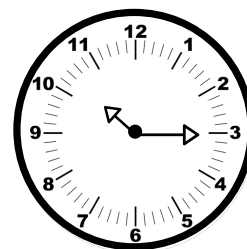
Write the time below each clock.



\_\_\_\_\_



\_\_\_\_\_



\_\_\_\_\_

Sarah has \$20 in her purse. She spends \$2.15 on strawberries and \$6.35 on apples. How much money does she have left? \_\_\_\_\_