

## Answer the following.

Fill in the missing numbers.

2, 4, \_\_\_\_\_, 8, 10, \_\_\_\_\_, \_\_\_\_\_, 16, \_\_\_\_\_, \_\_\_\_\_, 22, \_\_\_\_\_

5, 10, \_\_\_\_\_, 20, \_\_\_\_\_, \_\_\_\_\_, 35, 40, \_\_\_\_\_, \_\_\_\_\_, \_\_\_\_\_

Solve the addition and subtraction problems.

$15 + 4 = \underline{\hspace{2cm}}$

$20 - 8 = \underline{\hspace{2cm}}$

$11 + 5 = \underline{\hspace{2cm}}$

$14 - 8 = \underline{\hspace{2cm}}$

$16 - 4 = \underline{\hspace{2cm}}$

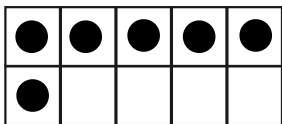
$10 + 5 = \underline{\hspace{2cm}}$

$9 + 9 = \underline{\hspace{2cm}}$

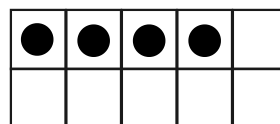
$12 + 6 = \underline{\hspace{2cm}}$

$12 - 5 = \underline{\hspace{2cm}}$

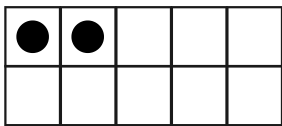
Fill in the ten frames to make 10. Complete the addition sentence.



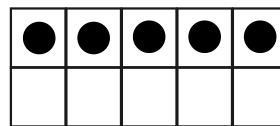
$6 + \underline{\hspace{2cm}} = 10$



$4 + \underline{\hspace{2cm}} = 10$

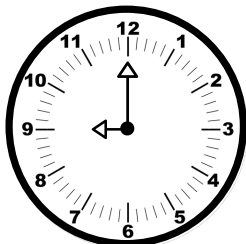


$2 + \underline{\hspace{2cm}} = 10$

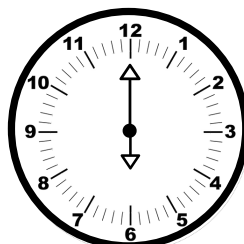


$5 + \underline{\hspace{2cm}} = 10$


Write the time below each clock.



\_\_\_\_\_



\_\_\_\_\_



\_\_\_\_\_