

Name : _____

Answer the following.

Solve the addition and subtraction problems.

$21 + 6 = \underline{\hspace{2cm}}$

$17 - 6 = \underline{\hspace{2cm}}$

$19 + 7 = \underline{\hspace{2cm}}$

$18 - 9 = \underline{\hspace{2cm}}$

$20 + 10 = \underline{\hspace{2cm}}$


$10 + 5 = \underline{\hspace{2cm}}$

$2 + 4 + 5 = \underline{\hspace{2cm}}$


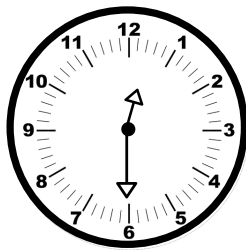
$6 + 4 + 3 = \underline{\hspace{2cm}}$

$3 + 3 + 3 = \underline{\hspace{2cm}}$

Complete the patterns.



Write the time below each clock.



Circle the biggest number.

25

41

26

43

42

35

John had 9 chocolates. He gave 5 to Nick. How many does John have left? _____