

Answer the following.

Fill in the missing numbers.

14, 13, _____, 11, _____, _____, 8, 7, _____, _____, 4, _____

10, _____, 12, 13, _____, _____, 16, _____, _____, 19, _____

Solve the addition and subtraction problems.

$8 + 6 = \underline{\hspace{2cm}}$

$10 - 8 = \underline{\hspace{2cm}}$

$4 + 9 = \underline{\hspace{2cm}}$

$10 - 4 = \underline{\hspace{2cm}}$

$7 - 4 = \underline{\hspace{2cm}}$

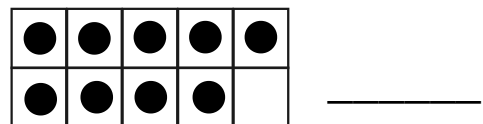
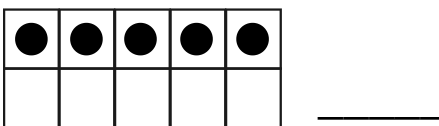
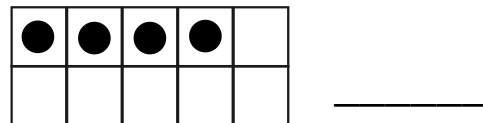
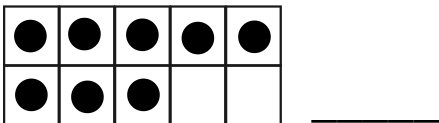
$5 + 6 = \underline{\hspace{2cm}}$

$9 + 3 = \underline{\hspace{2cm}}$


$7 + 6 = \underline{\hspace{2cm}}$

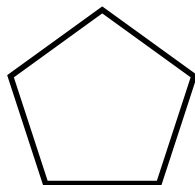
$8 - 5 = \underline{\hspace{2cm}}$

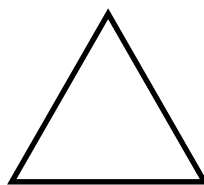
Count and write.




Write how many sides each shape has?









8 people are on the bus. 7 more people get on the bus. How many total people are on the bus now? _____